

# DRIVING THEORY EXAMINATION

(For vehicle category B )

## A - TRAFFIC LAW

1. When you are driving in middle intersection and want to turn left and another vehicles is traveling opposite, what do you do?  
a/ I must go first, because I have given a left turn signal already.....( )  
b/ I must not turn left immediately, I must want to allow the opposite vehicle to go first ..... ( \* )  
c/ I must go first because I have priority to turn left .....( )
2. When do you see NO-PARKING sign placing a long the road, how is its priority?  
a/ From the first intersection to the sign.....( )  
b/ From the sign to the next intersection.....( \* )  
c/ From the first intersection to the next intersection.....( )
3. What does shape of the supplementary signs?  
a/ It is square, white ground, and symbol, word or number is green.....( )  
b/ It is rectangle, white ground, and symbol, word or number is black.....( \* )  
c/ It is rectangle, blue ground, and symbol, word or number is black.....( )
4. How old a person allowed to obtain a driving license for class B?  
a/ At least 16 years( ) b/ A a/ At least 18 years( \* ) c/ at least 20 years( )
5. On the narrow road that can travel only one vehicle, one travels uphill and another travels downhill, which vehicle has the way light of way to go first?  
a/ The vehicle travels uphill ( \* ) b/ The vehicle travels downhill ( )  
c/ The both vehicles have the same right of way..... ( )
6. What is the meaning of no-shopping sign placing a long the road?  
a/ Not allow you to park your vehicle.....( \* )  
b/ Allow you to park your vehicle..... ( )  
c/ Allow you to park your vehicle at night.....( )
7. When you drive out-side build up area, How far can you stop your car at the speed limit of 90km/h on the dry-road and wet-road?  
a/ About 81m on the dry-road and 120m on the wet-road.....( \* )  
b/ About 60m on the dry-road and 160m on the wet-road.....( )  
c/ About 30m on the dry-road and 80m on the wet-road.....( )
8. Which vehicle has priority to go first, If a vehicle is traveling from the asphalt road and another from soil road ?  
a/ The vehicle from soil road has priority to go first.....( )  
b/ The vehicle is traveling from asphalt road has priority to go first.....( \* )

- c/Both vehicles have the same priority.....( )
- 9/How far from the intersection should you give a signal to turn left or right?( )  
 a/At least 10m ( )                      b/At least 15m ( )                      c/At least 20m ( \* )
- 10/When do you do, you see a pedestrian who is crossing or about to cross on the pedestrian crossing?  
 a/I must knob a horn.....( )  
 b/I must show down or stop the vehicle to let pedestrian to go first.....( \* )  
 c/I must increase the speed.....( )
- 11/What do you do, before you want to open the door to park your vehicle?  
 a/I must pull hand brake,turn off machine, look at around and open the door( \* )  
 b/I must open the door immediately.....( )  
 c/Apply the parking brake and open the door immediately.....( )
- 12/When you overtake another vehicle driving the same direction already, what do you do?  
 a/I have to turn right quickly .....( )  
 b/I shall increase the speed and travel straight ahead .....( )  
 c/I shall give signal to the right side and travel in to the right lane.....( \* )
- 13.In the build up area, what is the maximum speed limit if you are driving your car?  
 a/ 30 km/h ( )                      b/ 40km/h ( \* )                      c/ 50km/h ( )
- 14/What is your maximum speed limit if you are driving your car outside the build up area?  
 a/ 80 km/h ( \* )                      b/ 100km/h ( )                      c/ 120km/h ( )
- 15/How do you park your vehicle?  
 a/I shall park it appropriate to the traffic direction.....( \* )  
 b/I shall park it opposite to the traffic direction.....( )  
 c/I shall it appropriate or opposite to the traffic direction.....( )
- 16/Can you cross,stop, or park your vehicle on the diagonal hatched or chevron markings?  
 a/Yes....( )                      b/No....( \* )                      c/Yes I can, if the place is free...( )
- 17/How far can you park or stop your car from the intersection in the build-up area?  
 a/At least 5m on the boulevard and 2m on the other road.....( )  
 b/At least 8m on the boulevard and 3m on the other road.....( )  
 c/At least 10m on the boulevard and 8m on the other road.....( \* )
- 18/If you are driving at nihgt with your lights on high beam, when shall you dip lights to low beam?  
 a/When rain falls.....( )

- b/When I see an object on the road.....( )
- c/When I pass on coming vehicle.....( \* )
- 19/What does a solid yellow center line means?
- a/You are allowed to cross it.....( )
- b/You are not allowed to cross it.....( \* )
- c/You are allowed to cross it during overtaking another vehicle.....( )
- 20/What is the shape of warning signs?
- a/It is round( ) b/It is octagon( ) c/It is square with on diagonal vertical( \* )
- 21/Before starting down a hill, what should you do?
- a/I need to shift gear up.....( )
- b/I need to shift gear down.....( \* )
- c/I need to shift gear in neutral position.....( )
- 22/How far from are you allowed to park your car close to the curb?
- a/Within 0.25m ( \* ) b/Within 0.40m ( ) c/Within 0.50m ( )
- 23/Are you allowed to park vehicles abreast on the big road?
- a/Yes, I'm allowed to park vehicles abreast every time.....( )
- b/Yes, If I am in a hurry.....( ) c/No.....( \* )
- 24/The big and small vehicle travel in the opposite direction and shall one of  
than move backwards, which vehicle shall move backwards?
- a/Both vehicles shall move backwards.....( )
- b/A big vehicles shall move backwards.....( )
- c/A small vehicles shall move backwards.....( \* )
- 25/If you are driving behind another car speed of 80Km/h,  
how far should you keep the safety distance?
- a/At least 16m.....( ) b/At least 48m.....( \* ) c/At least 66m.....( )
- 26/What does ward "**Park**" means?
- a/The drive can park his vehicle for long or short time and he left his vehicle( \* )
- b/The drive can park his vehicle for long time and he must be in his vehicle...( )
- c/The drive can park his vehicle for short time and he must be near his vehicle( )
- ?27/How many milimeters is the mininum tread depth on the surface of car's tire?
- a/ At least 0.8mm...( ) b/ At least 1.0mm...( ) c/ At least 1.6m....( \* )
- 28/What does a steady yellow signal of traffic meaning ?
- a/ Stop....( ) b/ Go....( ) c/ Caution....( \* )
- 29/How many colors has the traffic light ?
- a/ 3 colors...( \* ) b/ 4 colors...( ) c/ 5 colors...( )
- 30/Before leaving your parking vehicle, how care to be taken ?
- a/ I must pull hand brake, turn off machine,  
be sure that the parking is safety and correct.....( )

- b/ I must open the door immediately .....( )
- c/ Apply the parking brake and open the door immediately .....( \* )
- 31/At what age of child that is allowed to sit in front seat next to the driver?
- a/ At the age of 5 upwards .....( )
- b/ At the age of 10 downwards .....( )
- c/ At the age of 10 upwards .....( \* )
- 32-1/How is the warning sign look like?
- a/Any square signs with a crossing line, two surrounding edge lines, the inside line is black and thick and the outside one is white and thin, and yellow surface black picture of signs.....( \* )
- b/Any circle signs white surrounding edge, blue inside surface and white picture of signs.....( )
- c/Any four-side signs within white edge and red inside surface.....( )
- 32-2/When is driver allowed to switch the high beam on? where?
- a/Anytimes and anywhere.....( )
- b/At night time, completely dark road and used interchangeably with low beam to overtake.....( \* )
- c/In the city and out of the city.....( )
- 33/When you see a no turn left sign, can you reverse back?
- a/ No...( \* )                      b/ Yes...( )                      c/Yes But at night...( )
- 34/How is priority of traffic sign ordered?
- a/Traffic light, traffic sign, police, marking line .....( )
- b/police, traffic sign, marking line, Traffic light .....( )
- c/police, Traffic light, traffic sign, marking line .....( \* )
- 35/Which side that driver needs to drive then he overtaking another one?
- a/The left hand side...( \* )    b/The right hand side...( )    c/Whichever is okay...( )
36. On the two direction way, how should driver stop or park?
- a/ Stop or park on the middle of the road .....( )
- b/ Stop or park on the left hand side .....( )
- c/ Stop or park on the right of the driver direction .....( \* )
37. How many hours that we are allowed to stop or park on the public road?
- a/ No longer than 24 hours .....( \* )
- b/ No longer than 48 hours .....( )
- c/ No longer than 72 hours .....( )





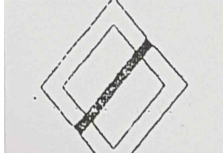




38. Along the road within yellow lines, one is solid line and the other one is broken. Which line that driver can cross and overtake another one?
- a/ The solid line is allowed driver to cross and overtake another car.....( )
  - b/ The broken one is allowed driver to cross and overtake another car.....( \* )
  - c/ Forbid not to cross and overtake another one on the broken line.....( )
39. When you are driving in probably close to the carriage way narrows or narrow road, What will you do?
- a/ I'll have to turn low-high beam off and on and horn many times.....( )
  - b/ I'll have to slow down or stop in order to let any cars moving from that area go first.....( \* )
  - c/ I'll need to speed up in order to get out of that in sudden.....( )
40. How are order signs look like?
- a/ Any circle signs within two-edge lines-an inside edge line is red and thick and the other one is white and thin-and black inside picture and mark....( \* )
  - b/ Any four side signs within two-edge lines-an inside edge line is blue and thick and the other one is white and thin-and yellow inside picture or mark .....( )
  - c/ Any circle signs within white edge lines, a blue inside edge surface and white inside picture or Sign.....( )
41. Before enter your vehicle to reverse what do you have to do?
- a/ The drivers have to careful look at the things in front of the vehicle and slowly reverse .....( )
  - b/ The drivers have to carefully look behind things if there is clear before you can enter in the vehicle, and than slowly reverse.....( \* )
  - c/ The drivers have to look at the right side. give the turning signal and the than slowly reverse ..... ( )
42. There are buffalos, cow and animals crossing on the bridge, what do you drivers have to do?
- a/ I have to slow down the speed,spot or reverse if there are too many of them ( \* )
  - b/ I have to press horn push them moving out from my vehicle .....( )
  - c/ I have to speed up to pass them .....( )
43. On the small narrow bridge, there are goods load vehicle and passenger vehicles that could not pass each other. which vehicles have to go first?
- a/ Tourist vehicle( \* ) b/ Heavy vehicle( ) c/ Both vehicles have the same rights( )
44. In case of parking, before get off from vehicle, what do you have to do?
- a/ I have to pull the handbrake, set down the engine, look around and make sure there no accident .....( \* )
  - b/ I have to get off immediately .....( )
  - c/ I have to pull the handrake then get off from my vehicle.....( )

- 45.Can the driver overtaking in 3 lines?  
 a/ Overtaking is allowed .....( )  
 b/ Overtaking is not allowed .....( \* )  
 c/ Overtaking is allowed on the road .....( )
- 46.If your vehicle set down in the middle of truck-road,what do you have to do?  
 a/ I have to repair it immediately .....( )  
 b/ I have to push it to the side and then I can repair or if there is not enough space,  
 I have to put a sign to alert or giving information .....( \* )  
 c/ I have to leave my vehicle and report to the traffic police.....( )
- 47.In case you drive on the loose stone road, what do you have to do?  
 a/ I have to drive slowly.....( \* )  
 b/ I have to drive in the speed of 80 kg/h.....( )  
 c/ I have to drive as fast as possible.....( )
- 48.In case there is a vehicle ask for overtaking, what do you have to do?  
 a/ I have to speed up and giving the right signat.....( )  
 b/ I have to keep the speed still and let that vehicle overtaking.....( )  
 c/ If the no obstacle in the front, I give turning right signat,speed down and  
 slowly move to the right to give a signat to overtaking vehicles at the back ( \* )
- 49.On the narrow street, there are 2 vehicles in difference direction, one going down stop  
 and another one going up stop, which vehicle is priority?  
 a/ Going up stop vehicle.....( \* )  
 b/ Going down stop vehicle.....( )  
 c/ Both vehicles.....( )
- 50.In case of wavy road with high, can it cause a traffic accident?  
 a/ It cannot cause my accidents .....( )  
 b/ It cannot cause traffic accidents to the high-speed driver .....( )  
 c/ It can cause traffic accidents to the high-speed driver.....( \* )

**B-TRAFFIC SIGNS(1)**

What do you these sings mean?

There are three answers for each question,please,tick( )a correct one among three.

1		a-No turn left ( ) b-No U-turn ( * ) c-Way for animal drawn carts ( )
2		a-No stopping from 16th to 31st of month ( ) b-No entry from 16th to 31st of month ( ) c-No parking from 16th to 31st of month ( * )
3		a-Place for car washing ( ) b-No parking for car ( ) c-Road end of quay side or river bank ( * )
4		a-Keep maximum safety distance between trucks 100m ( ) b-Keep safety distance between trucks at least 100m ( * ) c-No entry for trucks in 100m ( )
5		a-End of main road ( * ) b-Small road crossing ahead ( ) c-Main road ( )
6		a-No stopping on odd days. ( ) b-No parking on odd days. ( * ) c-No entry on odd days. ( )
7		a-Up and down hill ahead ( ) b-Bumpy road ahead ( * ) c-Way for animal drawn carts ( )
8	 70	a-Keep maximum safety distance 70m ( ) b-maximum speed limit 70Km/h ( ) c-Keep safety distance at least 70m ( * )
9		a-Red cross ahead.... ( ) b-Cross road ahead.. ( * ) c-Hospital ahead..... ( )
10		a-Road closed for all road users ( ) b-Road closed for vehicles loading inflammable ( ) c-Road closed for all vehicles ( * )

**B-TRAFFIC SIGNS(2)**



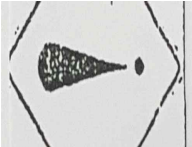

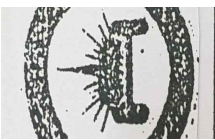





What do you these sings mean?

There are three answers for each question, please, tick( ) a correct one among three.

1		a-/Close for all motor-vehicles ( ) b-/Close for all road users ( * ) c-/No entry for all vehicles ( )
2		a-/Other dangers ( * ) b-/Be careful, When it rains ( ) c-/Be careful it can have the falling stone ( ) <느낌표 모양>
3		a-/No parking on odd days ( ) b-/No parking on even days ( * ) c-/No parking on second day of each month ( ) 로마숫자 II(우측 사진)
4		a-/Pedestrian crossing ( ) b-/Children crossing ahead ( * ) c-/A child with blind person crossing ahead ( )
5		a-/Give way to all traffic from the opposite direction ( * ) b-/Priority over all traffic from the opposite direction ( ) c-/Two ways traffic ( ) 데두리는 삼각형X/ 데두리는 원형O
6		a-/Pedestrian crossing ahead ( * ) b-/Road for Pedestrians go for a walk ( ) c-/ No entry for pedestrian ( )
7		a-/No stopping for vehicle loading inflammable or explosive goods ( ) b-/No parking for vehicle loading inflammable or explosive goods ( ) c-/No entry for vehicle loading inflammable or explosive goods ( * )
8		a-/Safety space between to vehicles. ( ) b-/One-way traffic zone ( ) c-/Two-way traffic zone ( * )
9		a-/No stopping from 1st to 15th of month ( ) b-/No entry from 1st to 15th of month ( ) c-/No parking from 1st to 15th of month ( * )
10		a-/No stopping ( ) b-/No entry ( ) c-/No parking ( * )



There are three answers for each question, please, tick( ) a correct one among three.

1		<p>a-/ It is the center line divided into two-ways traffic. Crossing and overtaking are allowed..... ( * )</p> <p>b-/ It is the center line divided into two-ways traffic. Crossing and overtaking are prohibited... ( )</p> <p>c-/ It is the center line divided into more lanes for the same traffic direction.. ( )</p>
2		<p>a-/No parking on odd days ( )</p> <p>b-/No parking on even days ( * )</p> <p>c-/No parking on second day of each month ( )</p>
3		<p>a-/Other dangers ( * )</p> <p>b-/Be careful, when it rains ( )</p> <p>c-/Be careful, it can have falling stone ( )</p>
4		<p>a-/Compulsory foot-path ( )</p> <p>b-/No entry for pedestrians ( )</p> <p>c-/End of Compulsory foot-path ( * )</p>
5		<p>a-/No stopping for vehicle loading inflammable or explosive goods ( )</p> <p>b-/No parking for vehicle loading inflammable or explosive goods ( )</p> <p>c-/No entry for vehicle loading inflammable or explosive goods ( * )</p>
6		<p>a-/Safety space between to vehicles. ( )</p> <p>b-/One-way traffic zone ( )</p> <p>c-/Two-way traffic zone ( * )</p>
7		<p>a-/Low flying aircraft? ( )</p> <p>b-/Airport ( * )</p> <p>c-/No stopping near airport ( )</p>
8		<p>a-/End of road that has loose stones ( )</p> <p>b-/Road has loose stones ( * )</p> <p>c-/No driving abreast ( )</p>
9		<p>a-/Pedestrian crossing ahead ( * )</p> <p>b-/Road for Pedestrians go for a walk ( )</p> <p>c-/ No entry for pedestrian ( )</p>
10		<p>a-/Close for all motor-vehicles ( )</p> <p>b-/Close for all road users ( * )</p> <p>c-/No entry for all vehicles ( )</p>

C-PRIORITY AT INTERSECTION(1)

Which car has the right of way to go first, second, third or fourth?

There are three answers for each question, please, tick ( ) a correct one among three.

1		<p>a- /Car N<sup>o</sup>2 travels first, then N<sup>o</sup>1, next N<sup>o</sup> 4 and finally N<sup>o</sup> 3 ( )</p> <p>b- /Car N<sup>o</sup>2 and N<sup>o</sup>3 travel first, then N<sup>o</sup>1, and next N<sup>o</sup> 4 ( )</p> <p>c- /Car N<sup>o</sup>2 travels first, then N<sup>o</sup>4, next N<sup>o</sup> 3 and finally N<sup>o</sup> 1 ( * )</p>
2		<p>a- /Car N<sup>o</sup>1 travel first, then N<sup>o</sup>2, and next N<sup>o</sup> 3 ( )</p> <p>b- /Car N<sup>o</sup>3 travel first, then N<sup>o</sup>2, and next N<sup>o</sup> 1 ( * )</p> <p>c- /Car N<sup>o</sup>3 travel first, then N<sup>o</sup>1, and next N<sup>o</sup> 2 ( )</p>
3		<p>a- /Car N<sup>o</sup>3 and N<sup>o</sup>2 travel first, then N<sup>o</sup> 1 ( )</p> <p>b- /Car N<sup>o</sup>1 and N<sup>o</sup>2 travel first, then N<sup>o</sup> 3 ( * )</p> <p>c- /Car N<sup>o</sup>2 travels first, then N<sup>o</sup>3 and next N<sup>o</sup>1 ( )</p>
4		<p>a- /Car N<sup>o</sup>1 travels first, then N<sup>o</sup>2, next N<sup>o</sup>3 and finally N<sup>o</sup>4 ( * )</p> <p>b- /Car N<sup>o</sup>2 and 4 travel first, then N<sup>o</sup>1 and next N<sup>o</sup> 3 ( )</p> <p>c- /Car N<sup>o</sup>1 travel first, then N<sup>o</sup>3, next N<sup>o</sup>1 and finally N<sup>o</sup>4 ( )</p>
5		<p>a- /Car N<sup>o</sup> 2 travels first, then N<sup>o</sup>3, and next N<sup>o</sup> 1 ( )</p> <p>b- /Car N<sup>o</sup>3 and N<sup>o</sup> 1 travel first, then N<sup>o</sup>2 ( * )</p> <p>c- /Car N<sup>o</sup>3 travel first, then N<sup>o</sup>2, and next N<sup>o</sup> 1 ( )</p>

Which car has the right of way to go first, second, third or fourth?

There are three answers for each question, please, tick ( ) a correct one among three.

1		<p>a-/Car N<sup>0</sup>1 travels first, then N<sup>0</sup>2 and next N<sup>0</sup> 3 and turn left ( )</p> <p>b-/Car N<sup>0</sup>3 travel first, then N<sup>0</sup>1 and next N<sup>0</sup> 2 ( )</p> <p>c-/Car N<sup>0</sup>2 travels first, then N<sup>0</sup>3 turn left and next N<sup>0</sup> 1 ( * )</p>
2		<p>a-/Car N<sup>0</sup>2 travels first, then N<sup>0</sup>1 ( )</p> <p>b-/Car N<sup>0</sup>1 travels first, then N<sup>0</sup>2 ( * )</p> <p>c-/Car N<sup>0</sup>1 travels first, then N<sup>0</sup>2 can travel at the same time ( )</p>
3		<p>a-/Car N<sup>0</sup>3 travels first, then N<sup>0</sup> 2 and next N<sup>0</sup>1 ( )</p> <p>b-/Car N<sup>0</sup>3 travel first, then N<sup>0</sup> 1 turns left and next N<sup>0</sup> 2 ( * )</p> <p>c-/Car N<sup>0</sup>1 travels first, then N<sup>0</sup>3 turns left and next N<sup>0</sup>2 ( )</p>
4		<p>a-/Car N<sup>0</sup>2 travels first, then N<sup>0</sup>1 and next N<sup>0</sup>3 ( * )</p> <p>b-/Car N<sup>0</sup>1 travels first, then N<sup>0</sup>2 and next N<sup>0</sup>3 ( )</p> <p>c-/Car N<sup>0</sup>3 travel first, then N<sup>0</sup>2 turns left and next N<sup>0</sup>1 ( )</p>
5		<p>a-/Car N<sup>0</sup> 2 travels first, then N<sup>0</sup>3, next N<sup>0</sup>4 and finally N<sup>0</sup>1 ( )</p> <p>b-/Car N<sup>0</sup>3 and N<sup>0</sup>1 travels first then N<sup>0</sup>2 and N<sup>0</sup>4 ( )</p> <p>c-/Car N<sup>0</sup>2 and N<sup>0</sup>4 travels first then N<sup>0</sup>1 and N<sup>0</sup>3 ( * )</p>

There are three answers for each question .Please,tick( )a correct one among three.

1-What is the stopping distance?

- a-/Reaction distance and braking distance.....( \* )
- b-/Traveling distance and reaction distance.....( )
- c-/Traveling distance and breaking distance.....( )

2.If the break fails, what can you stop you vehicle?

- a-/Shift the lowest gear, apply the parking brake gently and look for the place where I can stop.....( \* )
- b-/Increase the speed and look for the place I can stop.....( )
- c-/Shift the gear in neutral and apply the parking brake.....( )

3.Before you turn left or right at intersection, how far shall you give signal?

- a-/At least 5m .....( )
- b-/At least 10m .....( )
- c-/At least 20m .....( \* )

4.When you drive in to the curve,

what is the force that can make your vehicle our of the curve?

- a-/Engine force .....( )
- b-/Centrifugal force.....( \* )
- c-/Human force..... ( )

5.If while driving you get a flat or your tire blows out, What do you do?

- a-/Pushing down on the brake pedal as hard as I can .....( )
- b-/Shift the lowest gear, apply the parking brake .....( )
- c-/Grip the steering wheel tightly to straighten the vehicle.....( \* )

6.Before entering the are star driving backwards, What do you have to do

- a-/Looking forward for a suffcient distance, giving a signal, and then driving backing slowly .....( )
- b-/Looking backward clearly, giving a signal, and then driving backward slowly .....( \* )
- c-/Looking right hand side of car clearly,giving a signal, and then driving backward slowly .....( )

7.When your car slips on a dry road, what do you have to do?

- a-/Slow down and depress the brake pedal firmiy.....( )
- b-/Slow down do not depress the brake pedal.....( \* )
- c-/High speed do not press the brake.

8.What are dangers which is known to drive?

- a-/Buildings situated near the road .....( )
- b-/Mountain which nearby the road .....( )
- c-/Road and road users .....( \* )

9.At night during a vehicle coming from the opposite direction,

How far do you have to drop down the head light from beams to low beams?

- a-/About 35 meters( )
- b-/About 75 meters( )
- c-/About 160 meters( \* )

10.When you know that the tire is broken or cut, What do you have to do?

- a-/Have to strongly step on the brake as possible as.....( )
- b-/Speed down and find out the place to park.....( )
- c-/Have to speed down to stop steering wheel of a car or stoppiang durable and to drive forward by the road.....( \* )

11. When you drive into bend road, What is the power that can turn over the vehicle?  
 a-/Machine power ( )    b-/Contrifugal force ( \* )    c-/Human power ( )
12. When the brake is broken, What do you have to do?  
 a-/To reduce gear step by step .....( \* )  
 b-/Increase the gear and find out a place to park .....( )  
 c-/Not do anything let the vehicle stop slowly.....( )
13. When your car slips on the dry road, what do you do?  
 a-/To decrease speed and step the brake strongly.....( )  
 b-/ To decrease speed and do not step the brake.....( \* )  
 c-/ To increase speed and do not step the brake.....( )
- C-checking all car**  
 wheels.....
14. When do you inspect at the speedometer?  
 a-/Cleaning pretty ( )                      b-/Operating ( \* )                      c-/Good in leak ( )
15. What do you inspect at the rear mirror?  
 a-/Color of rear mirrors .....( )  
 b-/Property position of rear mirrors and good seeing.....( \* )  
 c-/Fragile of rear mirrors.....( )

There are three answers for each question. Please, tick  a correct one among three.

1. How deep is the tire thread?

- a/At least 0.5mm .....( )      b/At least 1.0mm .....( )      c/At least 1.6mm .....( \* )

2. What do you inspect at the steering-wheel?

- a/Air leaking ( )      b/Oil leaking ( )      c/Firmly and each to steer( \* )

3. What do you inspect at the windshield wiper?

- a/ Leaking of the windshield wiper.....( )

- b/Operating and cleaning pretty.....( \* )

- c/ Good color windshield pretty.....( )

4. Every time before you get on your car, what items are inspected?

- a/Petrol system....( )      b/Wheels and lights....( \* )      c/Coolant system....( )

5. What do you inspect at the radiator?

- a/Color of coolant.....( )      b/Temperature of coolant.....( )      c/Coolant level.....( \* )

6. What do you inspect of the headlights?

- a/High beam and process....( \* )      b/What and in leak....( )      c/Petrol in leak....( )

7. What do you check the Brake fluid level in the fluid reservoir?

- a/Always keep the brake fluid level is below the "MIN" mark on the reservoir.....( )

- b/ Always keep the brake fluid level is between the "MAX" and "MIN" mark on the reservoir.....( \* )

- c/Always keep the brake fluid level is above the "MAX" mark on the reservoir.....( )

8. What do you inspect at the battery.

- a/Looking battery density( )      b/Looking battery voltage( )      c/Looking battery water level( \* )

9. What do you on tank?

- a/The dirty water( )      b/The Temperature( )      c/Water level in tank ( \* )

10. What do you check when you are driving a car?

- a/Level on the water, oil and windshield wiper water level.....( )

- b/Processing of temperature gauge, battery gauge, and brake signal including pressure oil .....( \* )

c-없음

# DRIVING THEORY EXAMINATION

(For vehicle category B )

## A - TRAFFIC LAW

1. When you are driving in middle intersection and want to turn left and another vehicles is traveling opposite, what do you do?  
a/ I must go first, because I have given a left turn signal already.....( )  
b/ I must not turn left immediately, I must want to allow the opposite vehicle to go first ..... ( \* )  
c/ I must go first because I have priority to turn left .....( )
2. When do you see NO-PARKING sign placing a long the road, how is its priority?  
a/ From the first intersection to the sign.....( )  
b/ From the sign to the next intersection.....( \* )  
c/ From the first intersection to the next intersection.....( )
3. What does shape of the supplementary signs?  
a/ It is square, white ground, and symbol, word or number is green.....( )  
b/ It is rectangle, white ground, and symbol, word or number is black.....( \* )  
c/ It is rectangle, blue ground, and symbol, word or number is black.....( )
4. How old a person allowed to obtain a driving license for class B?  
a/ At least 16 years( ) b/ A a/ At least 18 years( \* ) c/ at least 20 years( )
5. On the narrow road that can travel only one vehicle, one travels uphill and another travels downhill, which vehicle has the way light of way to go first?  
a/ The vehicle travels uphill ( \* ) b/ The vehicle travels downhill ( )  
c/ The both vehicles have the same right of way..... ( )
6. What is the meaning of no-shopping sign placing a long the road?  
a/ Not allow you to park your vehicle.....( \* )  
b/ Allow you to park your vehicle..... ( )  
c/ Allow you to park your vehicle at night.....( )
7. When you drive out-side build up area, How far can you stop your car at the speed limit of 90km/h on the dry-road and wet-road?  
a/ About 81m on the dry-road and 120m on the wet-road.....( \* )  
b/ About 60m on the dry-road and 160m on the wet-road.....( )  
c/ About 30m on the dry-road and 80m on the wet-road.....( )
8. Which vehicle has priority to go first, If a vehicle is traveling from the asphalt road and another from soil road ?  
a/ The vehicle from soil road has priority to go first.....( )  
b/ The vehicle is traveling from asphalt road has priority to go first.....( \* )

- c/Both vehicles have the same priority.....( )
- 9/How far from the intersection should you give a signal to turn left or right?( )  
 a/At least 10m ( )                      b/At least 15m ( )                      c/At least 20m ( \* )
- 10/When do you do, you see a pedestrian who is crossing or about to cross on the pedestrian crossing?  
 a/I must knob a horn.....( )  
 b/I must show down or stop the vehicle to let pedestrian to go first.....( \* )  
 c/I must increase the speed.....( )
- 11/What do you do, before you want to open the door to park your vehicle?  
 a/I must pull hand brake,turn off machine, look at around and open the door( \* )  
 b/I must open the door immediately.....( )  
 c/Apply the parking brake and open the door immediately.....( )
- 12/When you overtake another vehicle driving the same direction already, what do you do?  
 a/I have to turn right quickly .....( )  
 b/I shall increase the speed and travel straight ahead .....( )  
 c/I shall give signal to the right side and travel in to the right lane.....( \* )
- 13.In the build up area, what is the maximum speed limit if you are driving your car?  
 a/ 30 km/h ( )                      b/ 40km/h ( \* )                      c/ 50km/h ( )
- 14/What is your maximum speed limit if you are driving your car outside the build up area?  
 a/ 80 km/h ( \* )                      b/ 100km/h ( )                      c/ 120km/h ( )
- 15/How do you park your vehicle?  
 a/I shall park it approprite to the traffic direction.....( \* )  
 b/I shall park it opposite to the traffic direction.....( )  
 c/I shall it approprite or opposite to the traffic direction.....( )
- 16/Can you cross,stop, or park your vehicle on the diagonal hatched or chevron markings?  
 a/Yes....( )                      b/No....( \* )                      c/Yes I can, if the place is free...( )
- 17/How far can you park or stop your car from the intersection in the build-up area?  
 a/At least 5m on the boulevard and 2m on the other road.....( )  
 b/At least 8m on the boulevard and 3m on the other road.....( )  
 c/At least 10m on the boulevard and 8m on the other road.....( \* )
- 18/If you are driving at nihgt with your lights on high beam, when shall you dip lights to low beam?  
 a/When rain falls.....( )



- b/When I see an object on the road.....( )
- c/When I pass on coming vehicle.....( \* )
- 19/What does a solid yellow center line means?
- a/You are allowed to cross it.....( )
- b/You are not allowed to cross it.....( \* )
- c/You are allowed to cross it during overtaking another vehicle.....( )
- 20/What is the shape of warning signs?
- a/It is round( ) b/It is octagon( ) c/It is square with on diagonal vertical( \* )
- 21/Before starting down a hill, what should you do?
- a/I need to shift gear up.....( )
- b/I need to shift gear down.....( \* )
- c/I need to shift gear in neutral position.....( )
- 22/How far from are you allowed to park your car close to the curb?
- a/Within 0.25m ( \* ) b/Within 0.40m ( ) c/Within 0.50m ( )
- 23/Are you allowed to park vehicles abreast on the big road?
- a/Yes, I'm allowed to park vehicles abreast every time.....( )
- b/Yes, If I am in a hurry.....( ) c/No.....( \* )
- 24/The big and small vehicle travel in the opposite direction and shall one of  
than move backwards, which vehicle shall move backwards?
- a/Both vehicles shall move backwards.....( )
- b/A big vehicles shall move backwards.....( )
- c/A small vehicles shall move backwards.....( \* )
- 25/If you are driving behind another car speed of 80Km/h,  
how far should you keep the safety distance?
- a/At least 16m.....( ) b/At least 48m.....( \* ) c/At least 66m.....( )
- 26/What does ward "**Park**" means?
- a/The drive can park his vehicle for long or short time and he left his vehicle( \* )
- b/The drive can park his vehicle for long time and he must be in his vehicle...( )
- c/The drive can park his vehicle for short time and he must be near his vehicle( )
- ?27/How many milimeters is the mininum tread depth on the surface of car's tire?
- a/ At least 0.8mm...( ) b/ At least 1.0mm...( ) c/ At least 1.6m....( \* )
- 28/What does a steady yellow signal of traffic meaning ?
- a/ Stop....( ) b/ Go....( ) c/ Caution....( \* )
- 29/How many colors has the traffic light ?
- a/ 3 colors...( \* ) b/ 4 colors...( ) c/ 5 colors...( )
- 30/Before leaving your parking vehicle, how care to be taken ?
- a/ I must pull hand brake, turn off machine,  
be sure that the parking is safety and correct.....( )

- b/ I must open the door immediately .....( )
- c/ Apply the parking brake and open the door immediately .....( \* )
- 31/At what age of child that is allowed to sit in front seat next to the driver?
- a/ At the age of 5 upwards .....( )
- b/ At the age of 10 downwards .....( )
- c/ At the age of 10 upwards .....( \* )
- 32-1/How is the warning sign look like?
- a/Any square signs with a crossing line, two surrounding edge lines, the inside line is black and thick and the outside one is white and thin, and yellow surface black picture of signs.....( \* )
- b/Any circle signs white surrounding edge, blue inside surface and white picture of signs.....( )
- c/Any four-side signs within white edge and red inside surface.....( )
- 32-2/When is driver allowed to switch the high beam on? where?
- a/Anytimes and anywhere.....( )
- b/At night time, completely dark road and used interchangeably with low beam to overtake.....( \* )
- c/In the city and out of the city.....( )
- 33/When you see a no turn left signs, can you reverse back?
- a/ No...( \* )                      b/ Yes...( )                      c/Yes But at night...( )
- 34/How is priority of traffic sign ordered?
- a/Traffic light, traffic sign, police, marking line .....( )
- b/police, traffic sign, marking line, Traffic light .....( )
- c/police, Traffic light, traffic sign, marking line .....( \* )
- 35/Which side that driver needs to drive then he overtaking another one?
- a/The left hand side...( \* )    b/The right hand side...( )    c/Whichever is okay...( )
36. On the two direction way, how should drive stop or park?
- a/ Stop or park on the middle of the road .....( )
- b/ Stop or park on the left hand side .....( )
- c/ Stop or park on the right of the driver direction .....( \* )
37. How many hours that that we are allowed to stop or park on the public road?
- a/ No longer than 24 hours .....( \* )
- b/ No longer than 48 hours .....( )
- c/ No longer than 72 hours .....( )

38. Along the road within yellow lines, one is solid line and the other one is broken. Which line that driver can cross and overtake another one?
- a/ The solid line is allowed driver to cross and overtake another car.....( )
  - b/ The broken one is allowed driver to cross and overtake another car.....( \* )
  - c/ Forbid not to cross and overtake another one on the broken line.....( )
39. When you are driving in probably close to the carriage way narrows or narrow road, What will you do?
- a/ I'll have to turn low-high beam off and on and horn many times.....( )
  - b/ I'll have to slow down or stop in order to let any cars moving from that area go first.....( \* )
  - c/ I'll need to speed up in order to get out of that in sudden.....( )
40. How are order signs look like?
- a/ Any circle signs within two-edge lines-an inside edge line is red and thick and the other one is white and thin-and black inside picture and mark....( \* )
  - b/ Any four side signs within two-edge lines-an inside edge line is blue and thick and the other one is white and thin-and yellow inside picture or mark .....( )
  - c/ Any circle signs within white edge lines, a blue inside edge surface and white inside picture or Sign.....( )
41. Before enter your vehicle to reverse what do you have to do?
- a/ The drivers have to careful look at the things in front of the vehicle and slowly reverse .....( )
  - b/ The drivers have to carefully look behind things if there is clear before you can enter in the vehicle, and than slowly reverse.....( \* )
  - c/ The drivers have to look at the right side. give the turning signal and the than slowly reverse ..... ( )
42. There are bufallos, cow and animals crossing on the bridge, what do you drivers have to do?
- a/ I have to slow down the speed,spot or reverse if there are too many of them ( \* )
  - b/ I have to press horn push them moving out from my vehicle .....( )
  - c/ I have to speed up to pass them .....( )
43. On the small narrow bridge, there are goods load vehicle and passenger vehicles that could not pass each other. which vehicles have to go first?
- a/ Tourist vehicle( \* ) b/ Heavy vehicle( ) c/ Both vehicles have the same rights( )
44. In case of parking, before get off from vehicle, what do you have to do?
- a/ I have to pull the handbrake, set down the engine, look around and make sure there no accident .....( \* )
  - b/ I have to get off immediately .....( )
  - c/ I have to pull the handrake then get off from my vehicle.....( )

- 45.Can the driver overtaking in 3 lines?
- a/ Overtaking is allowed .....( )
  - b/ Overtaking is not allowed .....( \* )
  - c/ Overtaking is allowed on the road .....( )
- 46.If your vehicle set down in the middle of truck-road,what do you have to do?
- a/ I have to repair it immediately .....( )
  - b/ I have to push it to the side and then I can repair or if there is not enough space, I have to put a sign to alert or giving information .....( \* )
  - c/ I have to leave my vehicle and report to the traffic police.....( )
- 47.In case you drive on the loose stone road, what do you have to do?
- a/ I have to drive slowly.....( \* )
  - b/ I have to drive in the speed of 80 kg/h.....( )
  - c/ I have to drive as fast as possible.....( )
- 48.In case there is a vehicle ask for overtaking, what do you have to do?
- a/ I have to speed up and giving the right signat.....( )
  - b/ I have to keep the speed still and let that vehicle overtaking.....( )
  - c/ If the no obstacle in the front, I give turning right signat,speed down and slowly move to the right to give a signat to overtaking vehicles at the back ( \* )
- 49.On the narrow street, there are 2 vehicles in difference direction, one going down stop and another one going up stop, which vehicle is priority?
- a/ Going up stop vehicle.....( \* )
  - b/ Going down stop vehicle.....( )
  - c/ Both vehicles.....( )
- 50.In case of wavy road with high, can it cause a traffic accident?
- a/ It cannot cause my accidents .....( )
  - b/ It cannot cause traffic accidents to the high-speed driver .....( )
  - c/ It can cause traffic accidents to the high-speed driver.....( \* )



